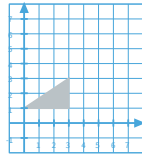
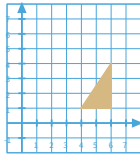
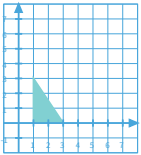
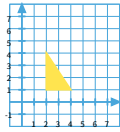




## Question #1

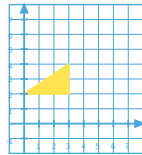
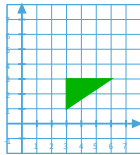
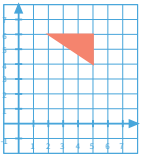
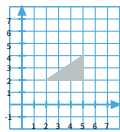
Which image shows a rotation?



Show Your Work

## Question #2

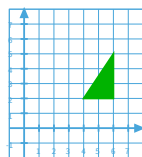
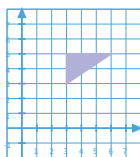
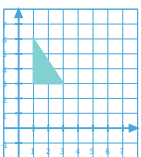
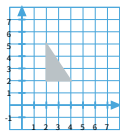
Which image shows a translation?



Show Your Work

## Question #3

Which image shows a reflection?

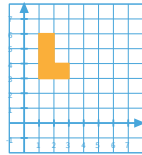
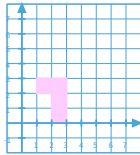
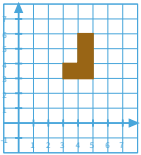
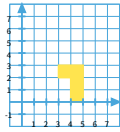


Show Your Work



### Question #4

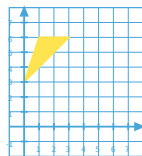
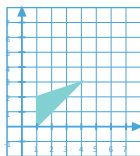
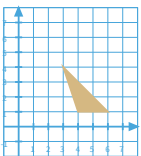
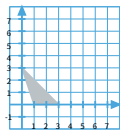
Which image shows a rotation?



Show Your Work

### Question #5

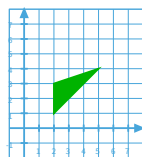
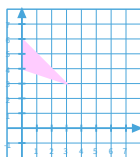
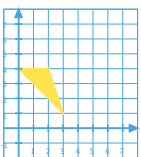
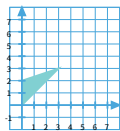
Which image shows a reflection?



Show Your Work

### Question #6

Which image shows a rotation?

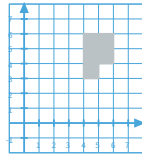
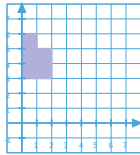
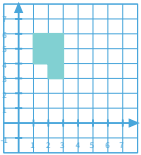
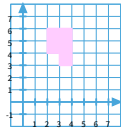


Show Your Work



Question #7

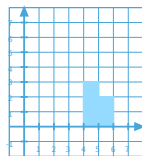
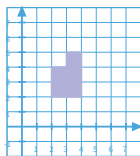
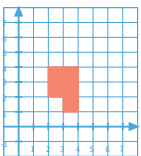
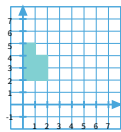
Which image shows a rotation?



Show Your Work

Question #8

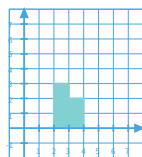
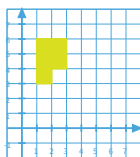
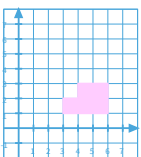
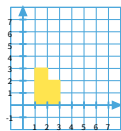
Which image shows a reflection?



Show Your Work

Question #9

Which image shows a reflection?



Show Your Work



## Answer Key

Question	Answer
#1	choice 3 (rot)
#2	choice 3 (trans)
#3	choice 3 (ref)
#4	choice 3 (rot)
#5	choice 3 (ref)
#6	choice 1 (rot)
#7	choice 2 (rot)
#8	choice 2 (ref)
#9	choice 2 (ref)
#10	choice 1 (rot)